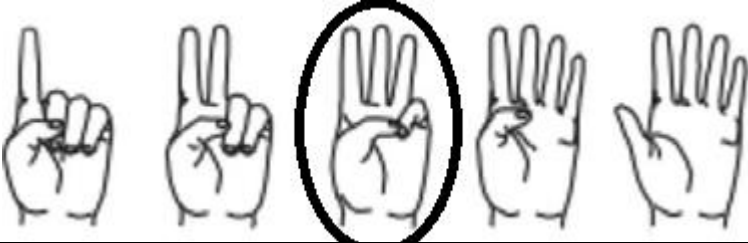

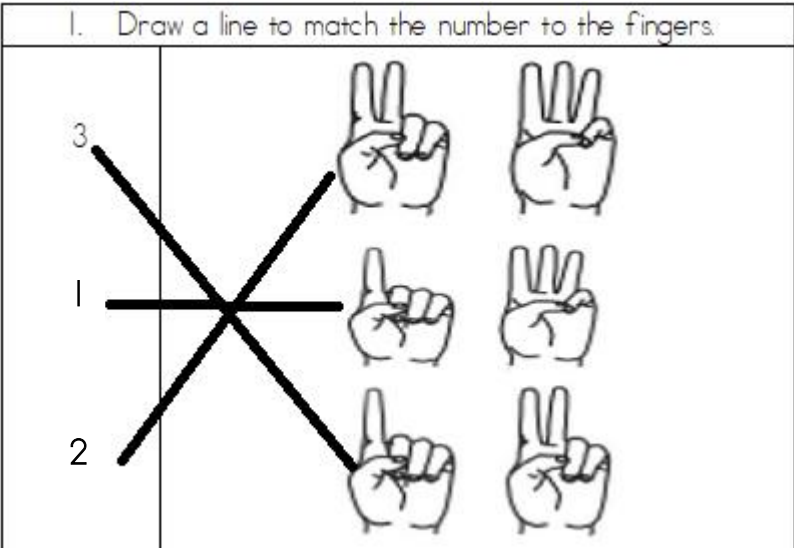













Mathematics Grade I Diagnostic Assessment Memorandum

Questions/	Expected answers - Award 1 mark for each correct answer- accept any form of drawing and verbal answers as well.	Marks		
		3	2	1
1.				
				
2.	<div style="border: 1px solid black; padding: 5px; width: fit-content; margin: 0 auto;"> <p style="margin: 0;">1. Draw a line to match the number to the fingers.</p>  </div>			
3.				

4.		3				
		2				
5.						
						
7.	7.1 Colour the soccer ball under the table blue .					
	7.2 Colour the soccer ball on the right of the table yellow					
	7.3 Colour the soccer ball on the table green .					
	7.4 Colour the soccer ball to the left of the table red .					
8.1						
8.2						
9.	9.1	6				
	9.2	5				
	9.3	3				
	9.4	2				
	9.5	4				
	9.6	1				
10.	10.1	4				
	10.2	3				
	10.3	1				
	10.4	2				
	10.5	First /1				
	10.6	Third /3				
11.	11.1	Night				
	11.2	Day				
	11.3	Day				
	11.4	Night				

--	--	--	--	--	--